



## RESOLUÇÃO DA FICHA DE TRABALHO/ATIVIDADE Nº:4

ÁREA CURRICULAR: Matemática

Ano: 2º

Elaborada por: Ana Isabel e Mónica Pragana


LEIA, ATENTAMENTE, AS SEGUINTE INSTRUÇÕES:

- Deves ver com atenção as respostas e corrigir os exercícios que erraste.

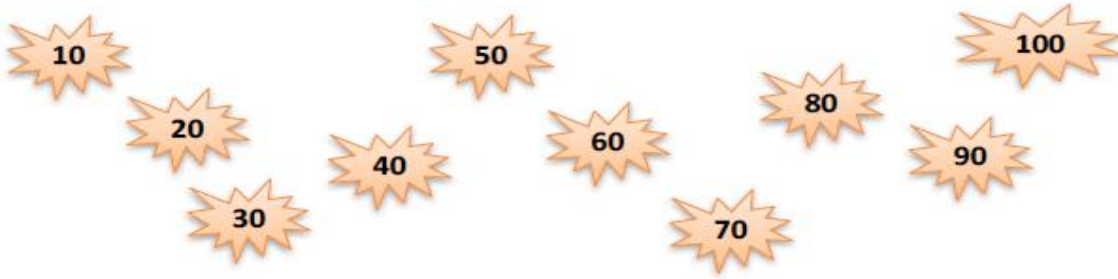
# Tabuada do 10

Nome: ..... Data: ..... / ..... / .....

1. Quantas pétalas?



2. Observa.



a) Completa.

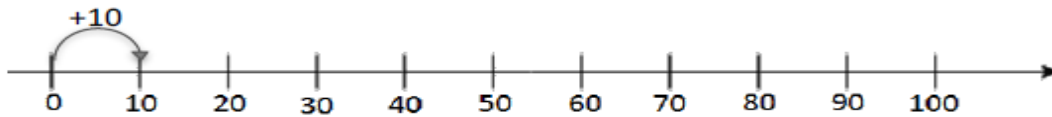
10	20	30	40	50	60	70	80	90	100
----	----	----	----	----	----	----	----	----	-----

b) Completa.

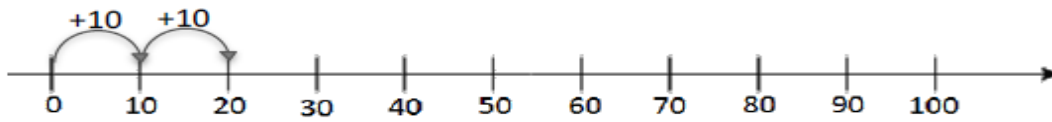
100	90	80	70	60	50	40	30	20	10
-----	----	----	----	----	----	----	----	----	----

3. Na reta numérica, salta os números de dez em dez, desde o zero.

Completa.

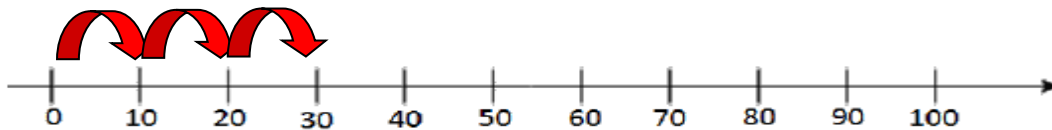


$$1 \times 10 = 10$$



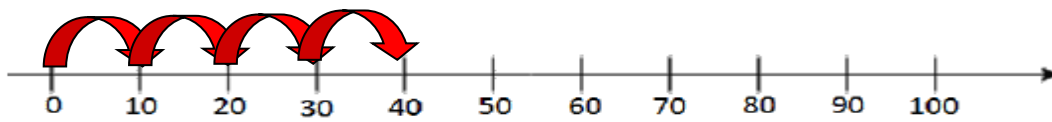
$$10 + 10 = 20$$

$$2 \times 10 = 20$$



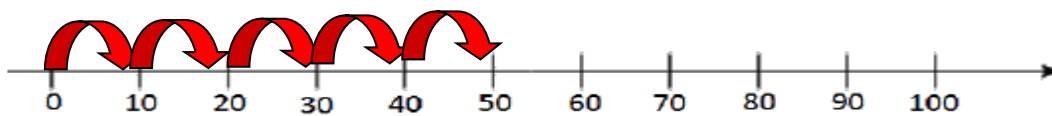
$$10 + 10 + 10 = 30$$

$$3 \times 10 = 30$$



$$10 + 10 + 10 + 10 = 40$$

$$4 \times 10 = 40$$



$$10 + 10 + 10 + 10 + 10 = 50$$

$$5 \times 10 = 50$$