



RESOLUÇÃO DA FICHA DE TRABALHO/ATIVIDADE Nº:3

ÁREA CURRICULAR: Matemática

Ano: 2º

Elaborada por: Ana Isabel e Mónica Pragana


LEIA, ATENTAMENTE, AS SEGUINTE INSTRUÇÕES:

- Deves ver com atenção as respostas e corrigir os exercícios que erraste.

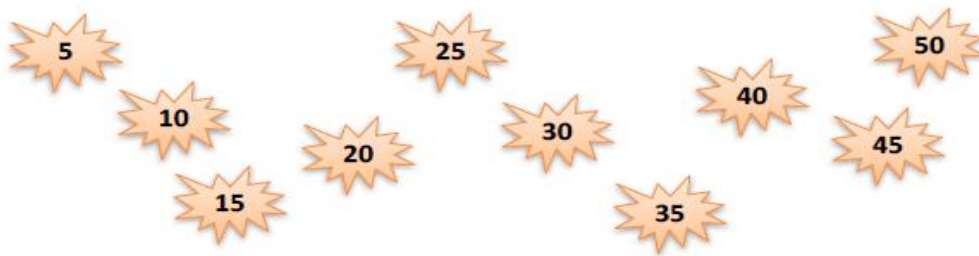
Tabuada do 5

Nome: Data: / /

1. Quantos dedos?



2. Observa.



a) Completa.

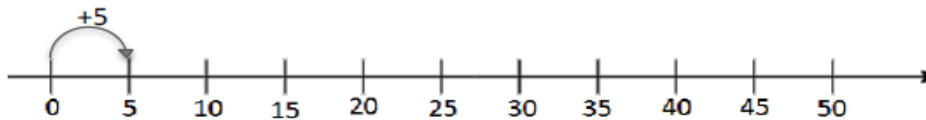
5	10	15	20	25	30	35	40	45	50
---	----	----	----	----	----	----	----	----	----

b) Completa.

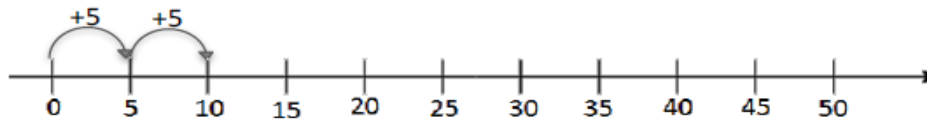
50	45	40	35	30	25	20	15	10	5
----	----	----	----	----	----	----	----	----	---

3. Na reta numérica, salta os números de cinco em cinco, desde o zero.

Completa.

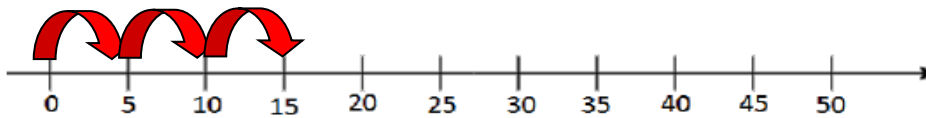


$$1 \times 5 = \dots 5 \dots$$



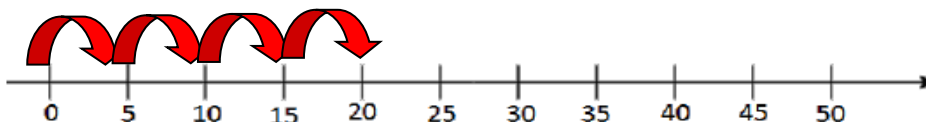
$$\dots 5 \dots + \dots 5 \dots = \dots 10 \dots$$

$$\dots 2 \dots \times \dots 5 \dots = \dots 10 \dots$$



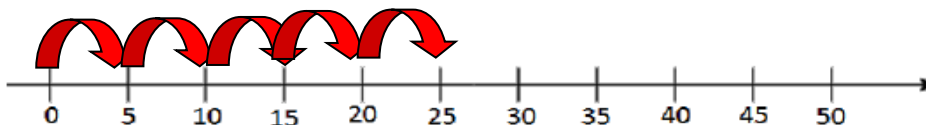
$$\dots 5 \dots + \dots 5 \dots + \dots 5 \dots = \dots 15 \dots$$

$$\dots 3 \dots \times \dots 5 \dots = \dots 15 \dots$$



$$\dots 5 \dots + \dots 5 \dots + \dots 5 \dots + \dots 5 \dots = \dots 20 \dots$$

$$\dots 4 \dots \times \dots 5 \dots = \dots 20 \dots$$



$$\dots 5 \dots + \dots 5 \dots + \dots 5 \dots + \dots 5 \dots + \dots 5 \dots = \dots 25 \dots$$

$$\dots 5 \dots \times \dots 5 \dots = \dots 25 \dots$$