



## RESOLUÇÃO DA FICHA DE TRABALHO/ATIVIDADE Nº:1

ÁREA CURRICULAR: Matemática

Ano: 2º

Elaborada por: NOME(S) DO(S) PROFESSOR(E)

LEIA, ATENTAMENTE, AS SEGUINTE INSTRUÇÕES:

- Deves ver com atenção as respostas e corrigir os exercícios que erraste.

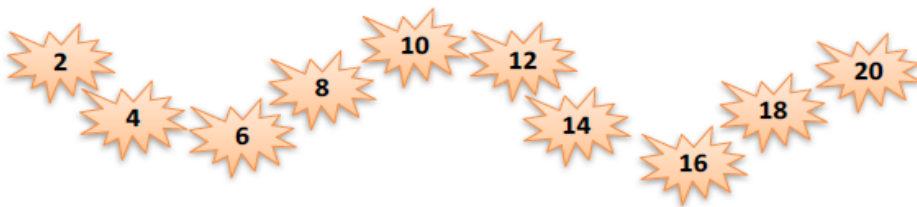
# Tabuada do 2

Nome: ..... Data: ..... / ..... / .....

1. Quantas rodas?



2. Observa.



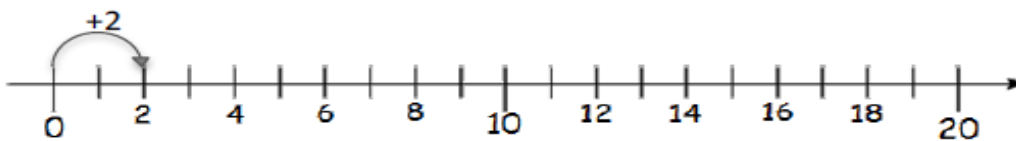
a) Completa.

2	4	6	8	10	12	14	16	18	20
---	---	---	---	----	----	----	----	----	----

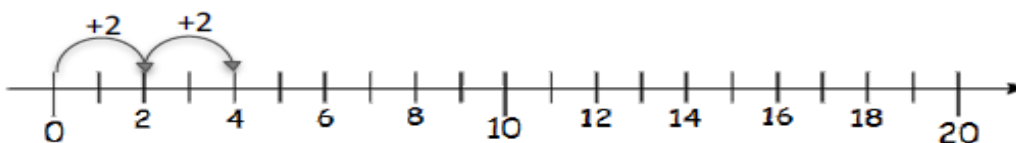
b) Completa.

20	18	16	14	12	10	8	6	4	2
----	----	----	----	----	----	---	---	---	---

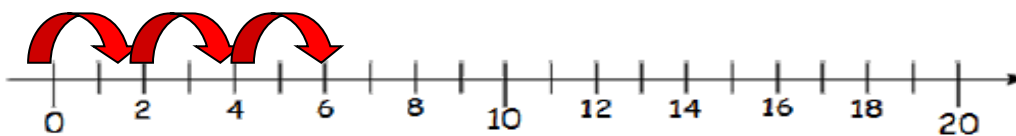
3. Na reta numérica, salta os números de dois em dois, desde o zero.  
Completa.



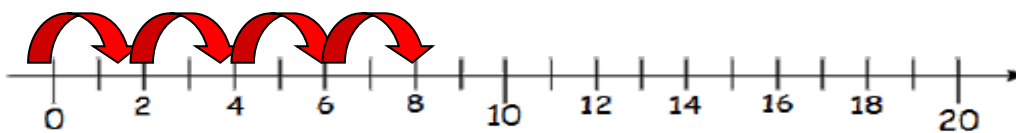
$$1 \times 2 = \dots 2$$



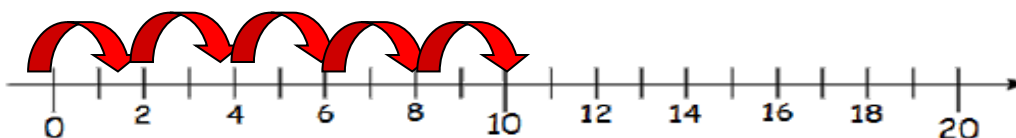
$$2 \dots + 2 \dots = 4 \dots \quad 2 \dots \times 2 \dots = 4 \dots$$



$$\dots + \dots + \dots = 6 \quad \dots \times 2 = 6$$



$$\dots + 2 + 2 + 2 + 2 = 8 \quad \dots \times 2 = 8$$



$$\dots + 2 + 2 + 2 + 2 + 2 = 10 \quad \dots \times 2 = 10$$