



ÁREA CURRICULAR: Matemática

Ano: 2º

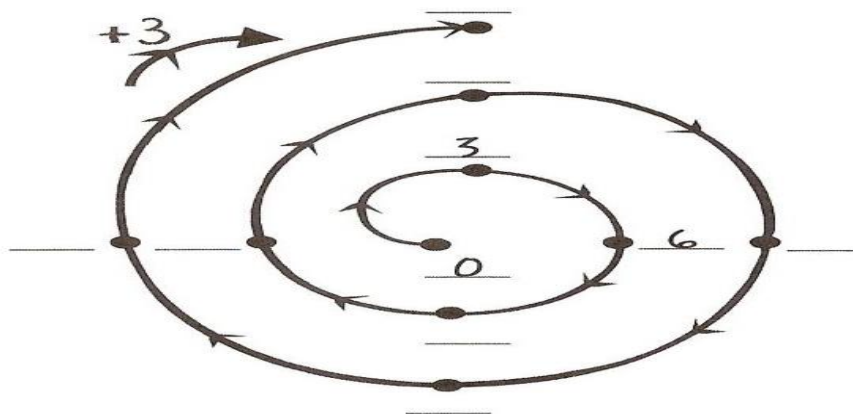
Ficha de Trabalho/Atividade nº: 7

Elaborada por: Ana Silva e Mónica Pragana

LEIA, ATENTAMENTE, AS SEGUINTE INSTRUÇÕES:

• Lê os enunciados com muita atenção e responde com calma.

**1. Completa a sequência.**



**2. Preenche a tabela de acordo com a tabuada do 3.**

X	1	2	3	4	5	6	7	8	9	10
3										

**3. Calcula mentalmente.**

$3 \times 3 = \underline{\quad}$

$3 \times \underline{\quad} = 24$

$\underline{\quad} \times 3 = 21$

$5 \times 3 = \underline{\quad}$

$3 \times \underline{\quad} = 12$

$\underline{\quad} \times 3 = 15$

$7 \times 3 = \underline{\quad}$

$3 \times \underline{\quad} = 30$

$\underline{\quad} \times 3 = 27$











$9 \times 3 = \underline{\quad}$

$3 \times \underline{\quad} = 18$

$\underline{\quad} \times 3 = 12$



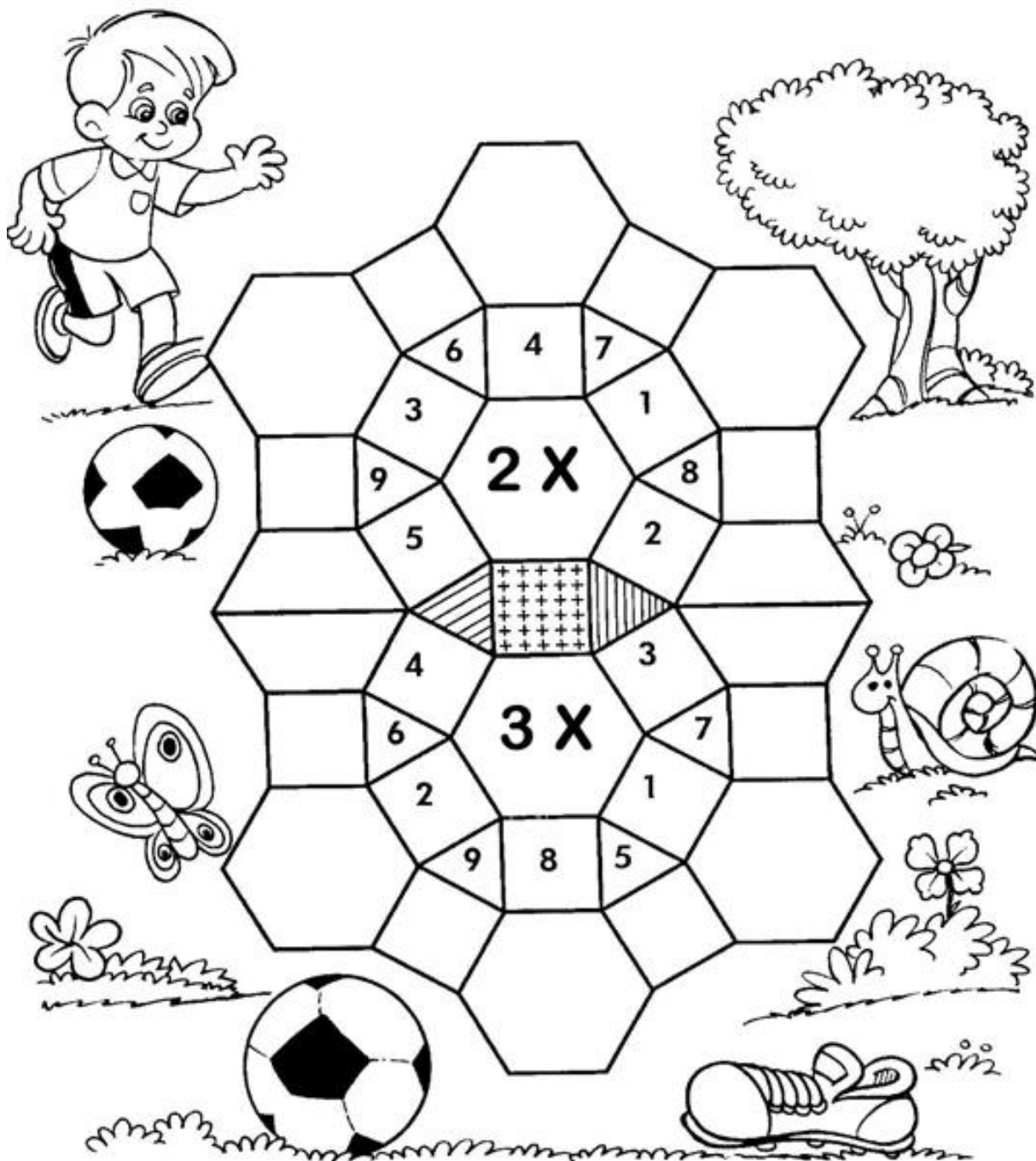
#### 4. Transforma as multiplicações em adições. Observa os exemplos.

$1 \times 3 = 3$	 3
$2 \times 3 = 6$	 $3 + 3 = 6$
$3 \times 3 = \underline{\quad}$	 $3 + 3 + 3 = \underline{\quad}$
$4 \times 3 = \underline{\quad}$	 $3 + 3 + 3 + 3 = \underline{\quad}$
$5 \times 3 = \underline{\quad}$	 $3 + 3 + 3 + 3 + 3 = \underline{\quad}$
$6 \times 3 = \underline{\quad}$	 $3 + 3 + 3 + 3 + 3 + 3 = \underline{\quad}$
$7 \times 3 = \underline{\quad}$	 $3 + 3 + 3 + 3 + 3 + 3 + 3 = \underline{\quad}$
$8 \times 3 = \underline{\quad}$	 $3 + 3 + 3 + 3 + 3 + 3 + 3 + 3 = \underline{\quad}$
$9 \times 3 = \underline{\quad}$	 $3 + 3 + 3 + 3 + 3 + 3 + 3 + 3 + 3 = \underline{\quad}$
$10 \times 3 = \underline{\quad}$	 $3 + 3 + 3 + 3 + 3 + 3 + 3 + 3 + 3 + 3 = \underline{\quad}$

#### 5. Efectua os cálculos e liga aos respetivos resultados.

- |                                 |      |                |
|---------------------------------|------|----------------|
| $3 + 3 + 3 + 3 + 3$             | • 9  | • $5 \times 3$ |
| $3 + 3$                         | • 15 | • $3 \times 3$ |
| $3 + 3 + 3$                     | • 6  | • $8 \times 3$ |
| $3 + 3 + 3 + 3 + 3 + 3 + 3 + 3$ | • 24 | • $2 \times 3$ |

6. Completa o mosaico da multiplicação, resolvendo os fatos.



Já sei 😊

Tenho de praticar 😐

Ainda não sei ☹️

## Fontes Bibliográficas:

- TOP! Prático a Tabuada (6 – 8 anos). Porto Editora. Edição/reimpressão de 2019.
- [https://br.pinterest.com/pin/607141593485206658/?nic\\_v1=1a1hqug1Df9AVII7n3AXib9DOdG6XGyPafkn\\_d7KcCNKh4OWDIrvoPMz9piujTppO8i](https://br.pinterest.com/pin/607141593485206658/?nic_v1=1a1hqug1Df9AVII7n3AXib9DOdG6XGyPafkn_d7KcCNKh4OWDIrvoPMz9piujTppO8i)

