



ÁREA CURRICULAR: Matemática

Ano: 2º

Ficha de Trabalho/Atividade nº:4

Elaborada por: Ana Isabel e Mónica Pragana

LEIA, ATENTAMENTE, AS SEGUINTE INSTRUÇÕES:

- Deves ler com atenção os enunciados e responder sem pressa para não errares.

Tabuada do 10

Nome: Data: / /

1. Quantas pétalas?

1 × 10 =

2 × 10 =

3 × 10 =

4 × 10 =

5 × 10 =

6 × 10 =

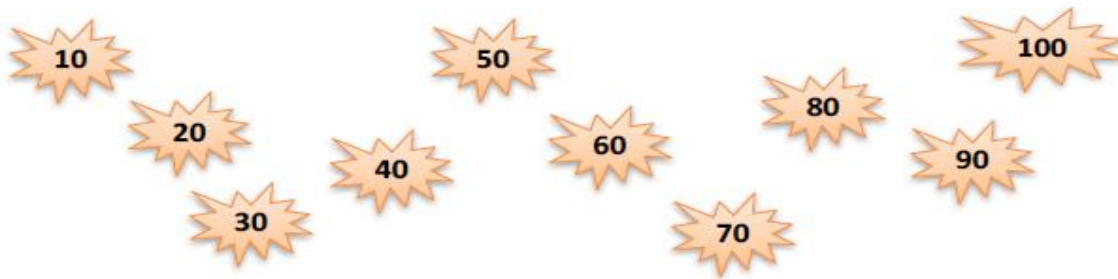
7 × 10 =

8 × 10 =

9 × 10 =

10 × 10 =

2. Observa.



a) Completa.

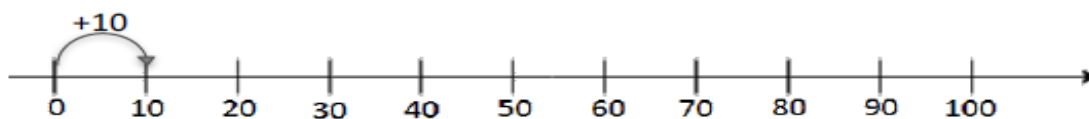


b) Completa.

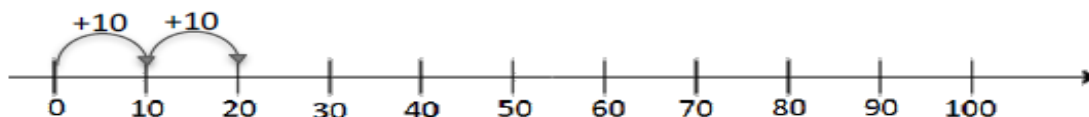


3. Na reta numérica, salta os números de dez em dez, desde o zero.

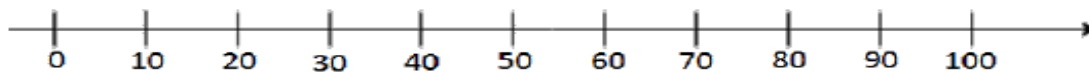
Completa.



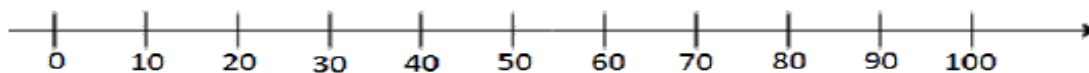
$$1 \times 10 = \dots\dots$$



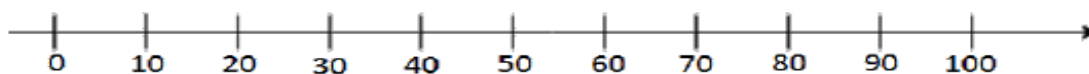
$$\dots\dots + \dots\dots = \dots\dots \quad \dots\dots \times \dots\dots = \dots\dots$$



$$\dots\dots + \dots\dots + \dots\dots = \dots\dots \quad \dots\dots \times \dots\dots = \dots\dots$$



$$\dots\dots\dots\dots\dots = \dots\dots \quad \dots\dots \times \dots\dots = \dots\dots$$



$$\dots\dots\dots\dots\dots = \dots\dots \quad \dots\dots \times \dots\dots = \dots\dots$$

