



ÁREA CURRICULAR: Matemática

Ano: 2º

Ficha de Trabalho/Atividade nº:3

Elaborada por: Ana Isabel e Mónica Pragana











LEIA, ATENTAMENTE, AS SEGUINTE INSTRUÇÕES:

- Deves ler com atenção os enunciados e responder sem pressa para não errares.


# Tabuada do 5

Nome: ..... Data: ..... / ..... / .....

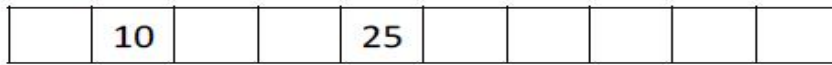
## 1. Quantos dedos?

	$1 \times 5 = \dots$
	$2 \times 5 = \dots$
	$3 \times 5 = \dots$
	$4 \times 5 = \dots$
	$5 \times 5 = \dots$
	$6 \times 5 = \dots$
	$7 \times 5 = \dots$
	$8 \times 5 = \dots$
	$9 \times 5 = \dots$
	$10 \times 5 = \dots$

2. Observa.



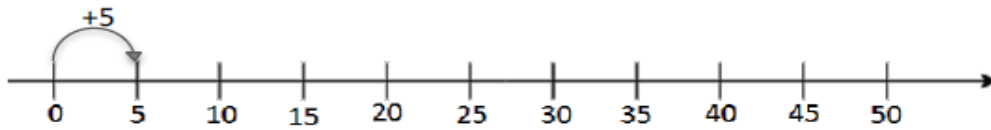
a) Completa.



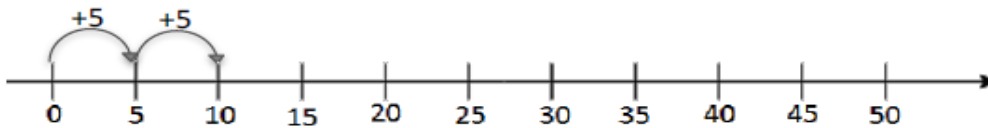
b) Completa.



3. Na reta numérica, salta os números de cinco em cinco, desde o zero.  
Completa.

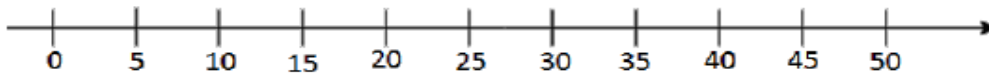


$1 \times 5 = \dots$



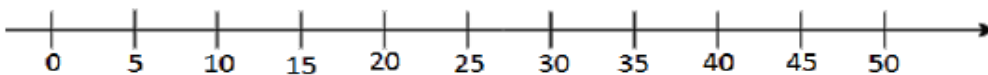
$\dots + \dots = \dots$

$\dots \times \dots = \dots$



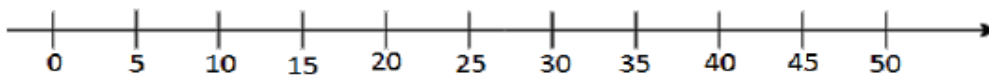
$\dots + \dots + \dots = \dots$

$\dots \times \dots = \dots$



$\dots = \dots$

$\dots \times \dots = \dots$



$\dots = \dots$

$\dots \times \dots = \dots$

