



ÁREA CURRICULAR: Matemática

Ano: 2º

Ficha de Trabalho/Atividade nº:2

Elaborada por: Ana Isabel e Mónica Pragana










LEIA, ATENTAMENTE, AS SEGUINTE INSTRUÇÕES:

- Deves ler com atenção os enunciados e responder sem pressa para não errares.

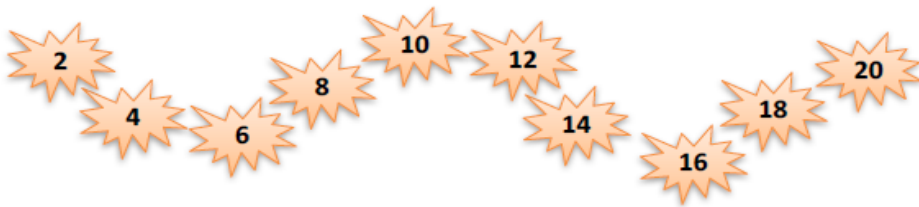
Tabuada do 2

Nome: Data: / /

1. Quantas rodas?

	$1 \times 2 = \dots$
	$2 \times 2 = \dots$
	$3 \times 2 = \dots$
	$4 \times 2 = \dots$
	$5 \times 2 = \dots$
	$6 \times 2 = \dots$
	$7 \times 2 = \dots$
	$8 \times 2 = \dots$
	$9 \times 2 = \dots$
	$10 \times 2 = \dots$

2. Observa.



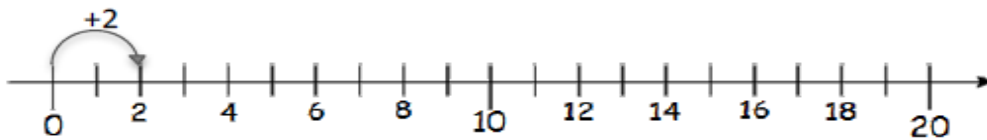
a) Completa.

	4			10				18	
--	---	--	--	----	--	--	--	----	--

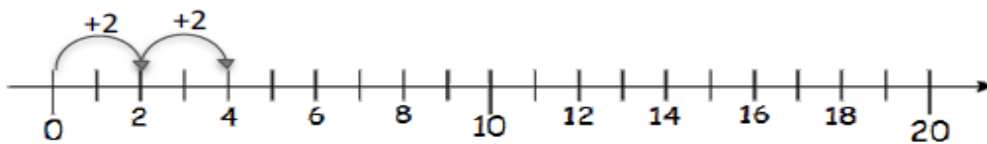
b) Completa.

	18		14			8			
--	----	--	----	--	--	---	--	--	--

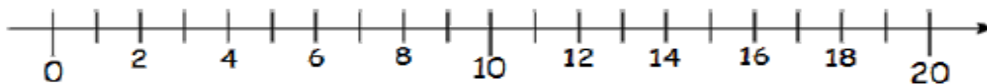
3. Na reta numérica, salta os números de dois em dois, desde o zero.
Completa.



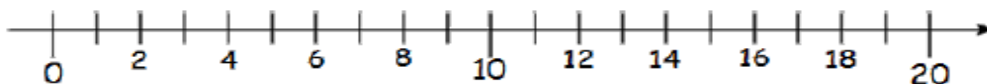
$$1 \times 2 = \dots\dots$$



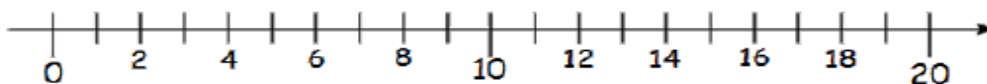
$$\dots\dots + \dots\dots = \dots\dots \quad \dots\dots \times \dots\dots = \dots\dots$$



$$\dots\dots + \dots\dots + \dots\dots = \dots\dots \quad \dots\dots \times \dots\dots = \dots\dots$$



$$\dots\dots\dots\dots\dots = \dots\dots \quad \dots\dots \times \dots\dots = \dots\dots$$



$$\dots\dots\dots\dots\dots = \dots\dots \quad \dots\dots \times \dots\dots = \dots\dots$$